

Avril 2021


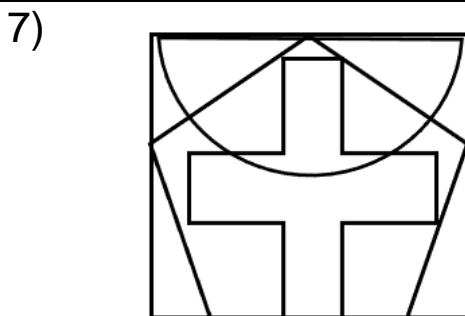
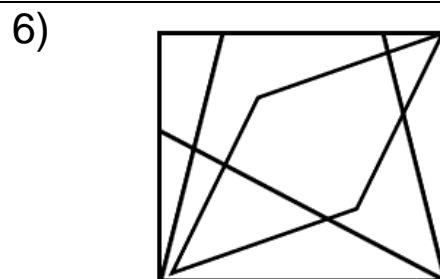
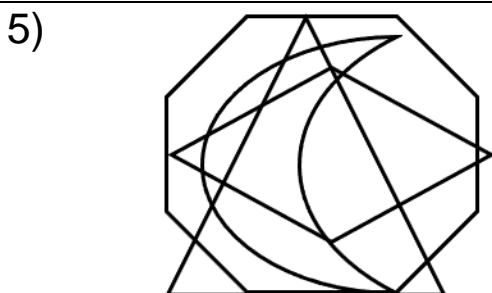
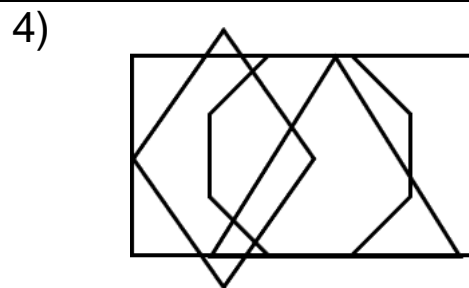
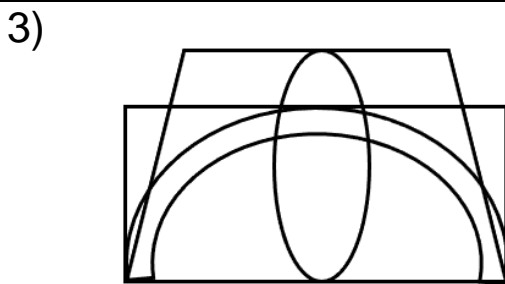
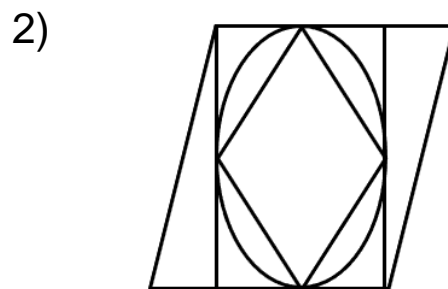
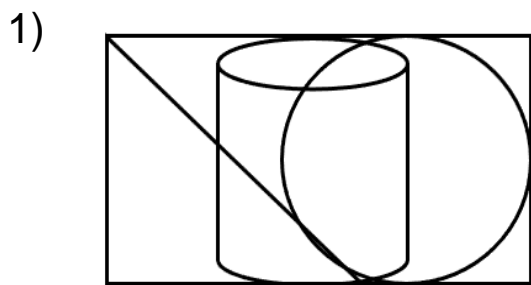
Niveau de difficulté



Méli-mélo

Citez toutes les formes géométriques présentes dans chacune des cases ci-dessous.

Il peut s'agir d'un(e) : cylindre, cercle, rectangle, arc, demi-cercle, parallélogramme, trapèze, triangle, pentagone, octogone, croissant, losange, croix, ovale.



Avril 2021

Niveau de difficulté



Méli-mélo – solution

1)

Rectangle
Triangle
Cylindre
Cercle

2)

Parallélogramme
Rectangle
Ovale
Losange

3)

Rectangle
Trapèze
Arc
Ovale

4)

Rectangle
Losange
Octogone
Triangle

5)

Octogone
Triangle
Losange
Croissant

6)

Rectangle
Trapèze
Losange
Triangle

7)

Rectangle
Demi-cercle
Pentagone
Croix

8)

Cercle
Triangle
Parallélogramme
Demi-cercle